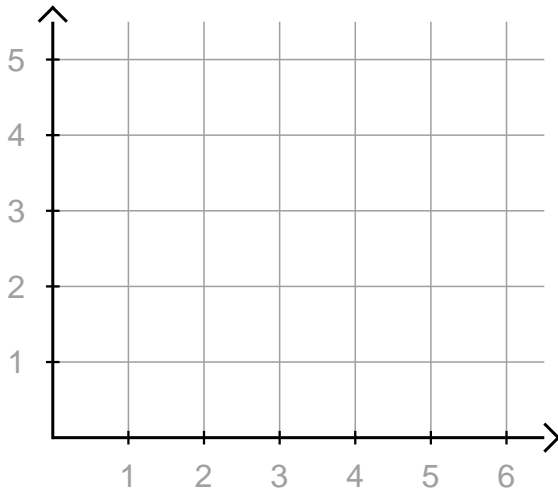


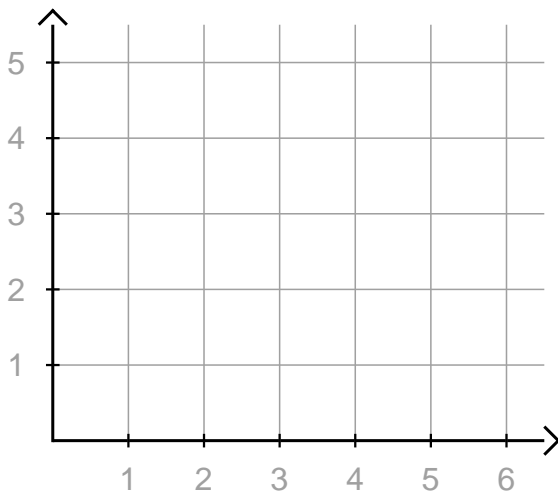
① a) $A(1/4), B(6/4), C(3/5)$



b) $A(5/5), B(0/4), C(6/2)$



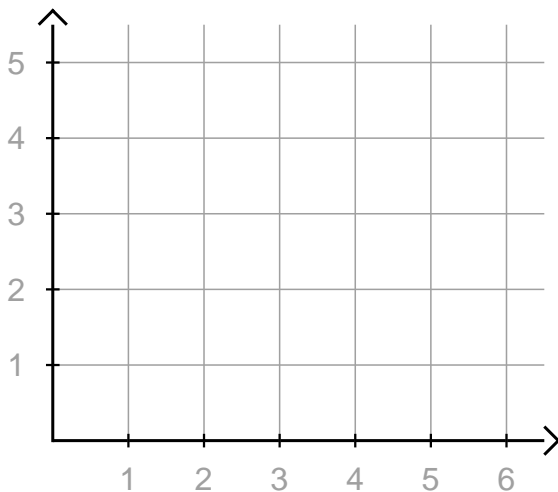
② a) $A(2/4), B(2/2), C(4/5)$



b) $A(2/1), B(5/4), C(1/1)$



③ a) $A(2/5), B(1/1), C(6/5)$



b) $A(6/3), B(3/5), C(5/0)$



