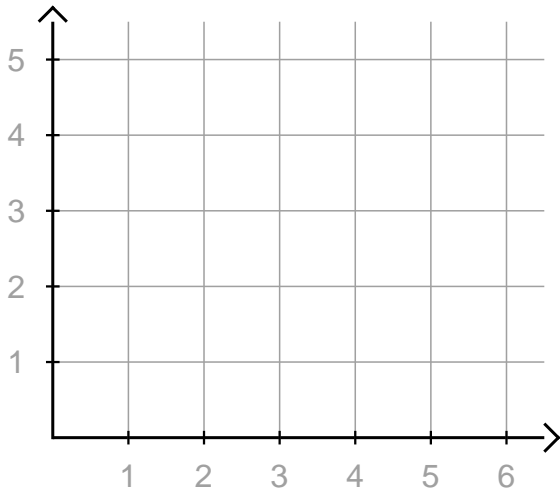


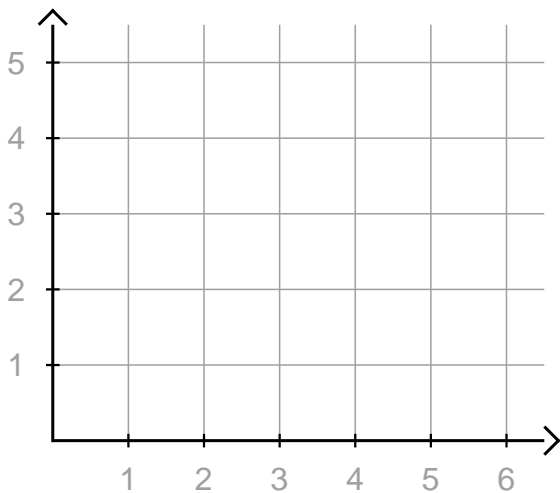
① a) $A(4/1), B(5/4), C(3/5)$



b) $A(2/4), B(2/2), C(4/3)$



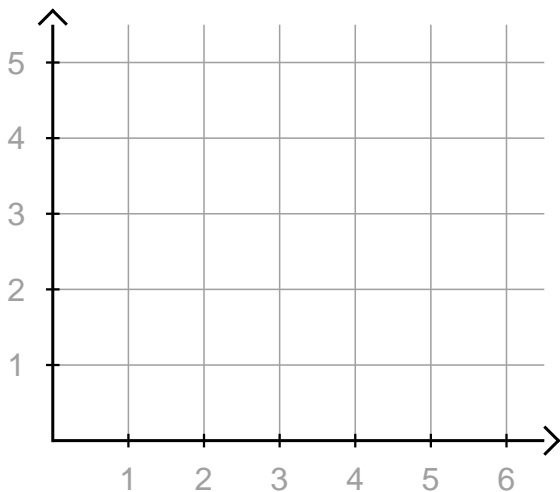
② a) $A(1/5), B(6/3), C(5/5)$



b) $A(6/4), B(1/4), C(4/1)$



③ a) $A(2/4), B(0/0), C(6/0)$



b) $A(1/5), B(6/1), C(5/5)$



