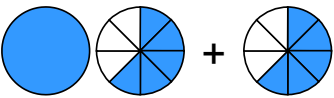






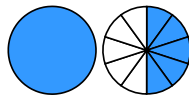




Übertrage die Grafiken in die Bruch-Schreibweise und rechne aus:

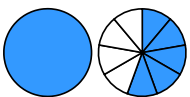
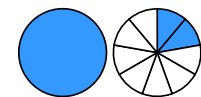
1 a)  + 
 → $\frac{\square}{\square} + \frac{\square}{\square} = \frac{\square}{\square} = \square \frac{\square}{\square}$

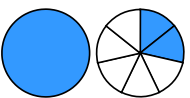
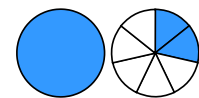
b)  + 
 → $\frac{\square}{\square} + \square \frac{\square}{\square} = \square \frac{\square}{\square}$



c)  + 
 → $\frac{\square}{\square} + \square \frac{\square}{\square} = \square \frac{\square}{\square}$



d)  + 
 → $\frac{\square}{\square} + \square \frac{\square}{\square} = \square \frac{\square}{\square} = \square \frac{\square}{\square}$


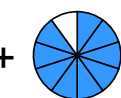
2 a)  + 
 → $\frac{\square}{\square} + \square \frac{\square}{\square} = \square \frac{\square}{\square}$


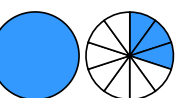
b)  + 
 → $\square \frac{\square}{\square} + \square \frac{\square}{\square} = \square \frac{\square}{\square}$

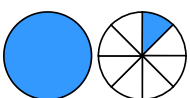
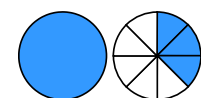
c)  + 
 → $\square \frac{\square}{\square} + \square \frac{\square}{\square} = \square \frac{\square}{\square}$

d)  + 
 → $\frac{\square}{\square} + \square \frac{\square}{\square} = \square \frac{\square}{\square}$

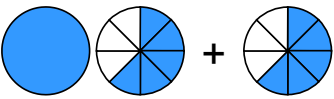

3 a)  + 
 → $\frac{\square}{\square} + \square \frac{\square}{\square} = \square \frac{\square}{\square}$



b)  + 
 → $\square \frac{\square}{\square} + \frac{\square}{\square} = \square \frac{\square}{\square} = \square \frac{\square}{\square}$



c)  + 
 → $\frac{\square}{\square} + \square \frac{\square}{\square} = \square \frac{\square}{\square}$


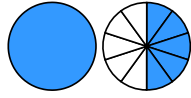
d)  + 
 → $\square \frac{\square}{\square} + \square \frac{\square}{\square} = \square \frac{\square}{\square} = \square \frac{\square}{\square}$



Übertrage die Grafiken in die Bruch-Schreibweise und rechne aus:

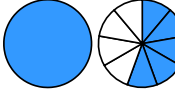
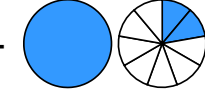
① a)  + 
 $\rightarrow 1 \frac{5}{8} + \frac{5}{8} = 2 \frac{2}{8} = 2 \frac{1}{4}$

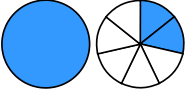
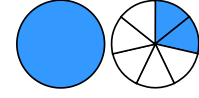
b)  + 
 $\rightarrow \frac{2}{10} + 2 \frac{7}{10} = 2 \frac{9}{10}$



c)  + 
 $\rightarrow \frac{2}{5} + 2 \frac{2}{5} = 2 \frac{4}{5}$



d)  + 
 $\rightarrow \frac{1}{10} + 1 \frac{5}{10} = 1 \frac{6}{10} = 1 \frac{3}{5}$


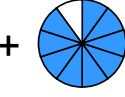
② a)  + 
 $\rightarrow \frac{4}{9} + 2 \frac{7}{9} = 3 \frac{2}{9}$


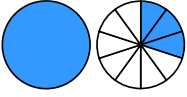
b)  + 
 $\rightarrow 1 \frac{5}{9} + 1 \frac{2}{9} = 2 \frac{7}{9}$

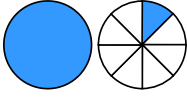
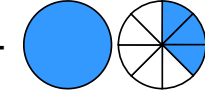
c)  + 
 $\rightarrow 1 \frac{2}{7} + 1 \frac{2}{7} = 2 \frac{4}{7}$

d)  + 
 $\rightarrow \frac{2}{8} + 2 \frac{7}{8} = 3 \frac{1}{8}$

③ a)  + 
 $\rightarrow \frac{3}{7} + 2 \frac{5}{7} = 3 \frac{1}{7}$

b)  + 
 $\rightarrow 2 \frac{9}{10} + \frac{9}{10} = 3 \frac{8}{10} = 3 \frac{4}{5}$

c)  + 
 $\rightarrow \frac{4}{10} + 1 \frac{3}{10} = 1 \frac{7}{10}$

d)  + 
 $\rightarrow 1 \frac{1}{8} + 1 \frac{3}{8} = 2 \frac{4}{8} = 2 \frac{1}{2}$