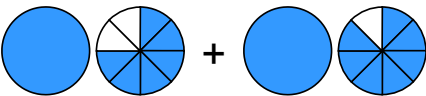
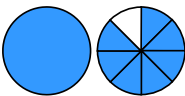
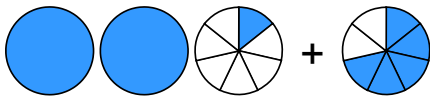

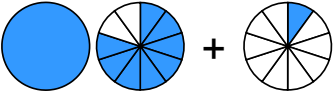

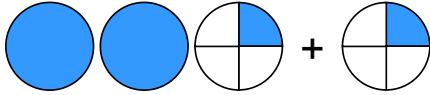



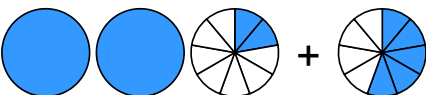

Übertrage die Grafiken in die Bruch-Schreibweise und rechne aus:



1 a)  + 
 → $\frac{\square}{\square} + \frac{\square}{\square} = \frac{\square}{\square}$

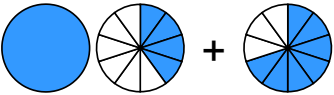

b)  + 
 → $\frac{\square}{\square} + \frac{\square}{\square} = \frac{\square}{\square}$

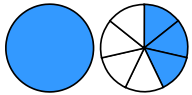
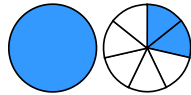
c)  + 
 → $\frac{\square}{\square} + \frac{\square}{\square} = \frac{\square}{\square}$


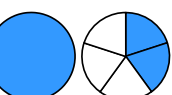
d)  + 
 → $\frac{\square}{\square} + \frac{\square}{\square} = \frac{\square}{\square} = \frac{\square}{\square}$



2 a)  + 
 → $\frac{\square}{\square} + \frac{\square}{\square} = \frac{\square}{\square}$



b)  + 
 → $\frac{\square}{\square} + \frac{\square}{\square} = \frac{\square}{\square}$

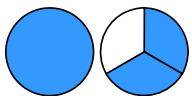
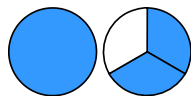
c)  + 
 → $\frac{\square}{\square} + \frac{\square}{\square} = \frac{\square}{\square}$

d)  + 
 → $\frac{\square}{\square} + \frac{\square}{\square} = \frac{\square}{\square}$

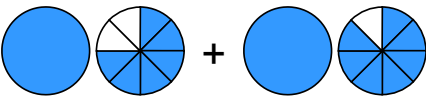
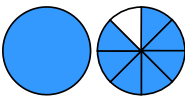
3 a)  + 
 → $\frac{\square}{\square} + \frac{\square}{\square} = \frac{\square}{\square}$

b)  + 
 → $\frac{\square}{\square} + \frac{\square}{\square} = \frac{\square}{\square} = \frac{\square}{\square}$


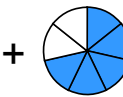
c)  + 
 → $\frac{\square}{\square} + \frac{\square}{\square} = \frac{\square}{\square}$

d)  + 
 → $\frac{\square}{\square} + \frac{\square}{\square} = \frac{\square}{\square}$

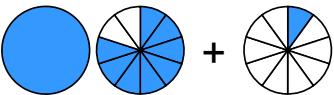

Übertrage die Grafiken in die Bruch-Schreibweise und rechne aus:

① a)  + 


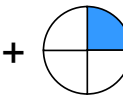
$$\rightarrow 1\frac{6}{8} + 1\frac{7}{8} = 3\frac{5}{8}$$

b)  + 

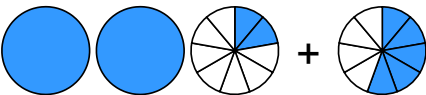

$$\rightarrow 2\frac{1}{7} + \frac{5}{7} = 2\frac{6}{7}$$

c)  + 


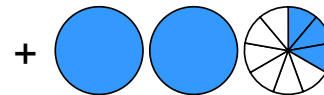
$$\rightarrow 1\frac{8}{10} + \frac{1}{10} = 1\frac{9}{10}$$

d)  + 

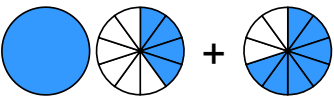

$$\rightarrow 2\frac{1}{4} + \frac{1}{4} = 2\frac{2}{4} = 2\frac{1}{2}$$

② a)  + 

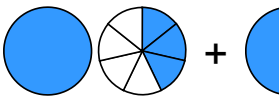
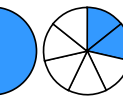
$$\rightarrow 2\frac{2}{9} + \frac{5}{9} = 2\frac{7}{9}$$

b)  + 


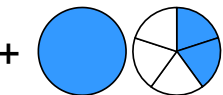
$$\rightarrow \frac{4}{9} + 2\frac{3}{9} = 2\frac{7}{9}$$

c)  + 


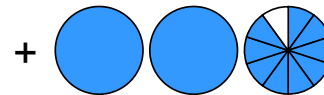
$$\rightarrow 1\frac{4}{10} + \frac{7}{10} = 2\frac{1}{10}$$

d)  + 



$$\rightarrow 1\frac{3}{7} + 1\frac{2}{7} = 2\frac{5}{7}$$

③ a)  + 


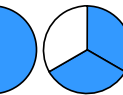
$$\rightarrow \frac{1}{5} + 1\frac{2}{5} = 1\frac{3}{5}$$

b)  + 

$$\rightarrow \frac{5}{10} + 2\frac{9}{10} = 3\frac{4}{10} = 3\frac{2}{5}$$

c)  + 

$$\rightarrow \frac{1}{3} + 2\frac{1}{3} = 2\frac{2}{3}$$

d)  + 

$$\rightarrow 1\frac{2}{3} + 1\frac{2}{3} = 3\frac{1}{3}$$