
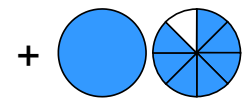
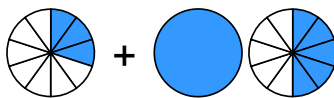
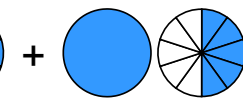


**Übertrage die Grafiken in die Bruch-Schreibweise und rechne aus:**

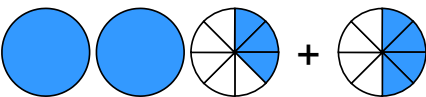

1

a)  + 

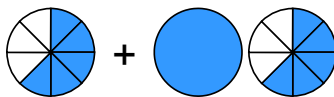
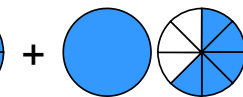
→  $\frac{\square}{\square} + \square \frac{\square}{\square} = \square \frac{\square}{\square}$

b)  + 

→  $\frac{\square}{\square} + \square \frac{\square}{\square} = \square \frac{\square}{\square} = \square \frac{\square}{\square}$

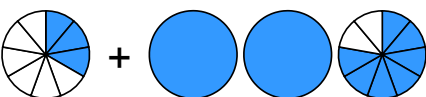
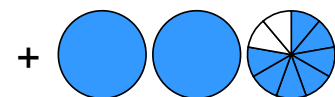
c)  + 

→  $\square \frac{\square}{\square} + \frac{\square}{\square} = \square \frac{\square}{\square}$

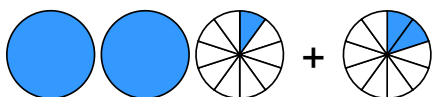

d)  + 

→  $\frac{\square}{\square} + \square \frac{\square}{\square} = \square \frac{\square}{\square} = \square \frac{\square}{\square}$



2

a)  + 

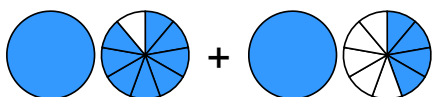
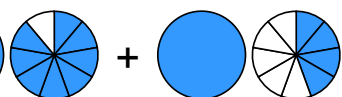
→  $\frac{\square}{\square} + \square \frac{\square}{\square} = \square \frac{\square}{\square}$

b)  + 

→  $\square \frac{\square}{\square} + \frac{\square}{\square} = \square \frac{\square}{\square}$

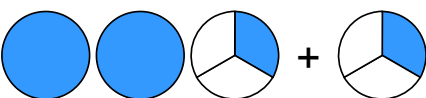

c)  + 

→  $\frac{\square}{\square} + \square \frac{\square}{\square} = \square \frac{\square}{\square}$

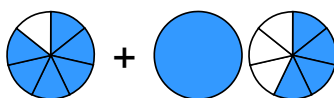
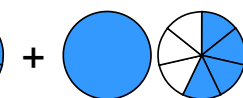
d)  + 

→  $\square \frac{\square}{\square} + \square \frac{\square}{\square} = \square \frac{\square}{\square} = \square \frac{\square}{\square}$

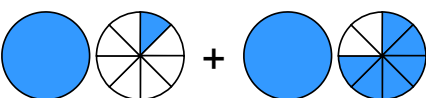
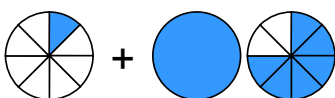
3

a)  + 

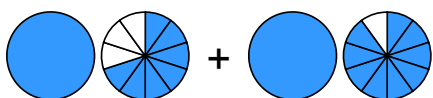
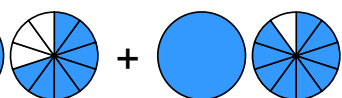
→  $\square \frac{\square}{\square} + \frac{\square}{\square} = \square \frac{\square}{\square}$

b)  + 

→  $\frac{\square}{\square} + \square \frac{\square}{\square} = \square \frac{\square}{\square}$


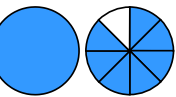
c)  + 

→  $\square \frac{\square}{\square} + \frac{\square}{\square} = \square \frac{\square}{\square}$


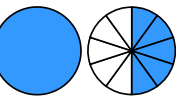
d)  + 

→  $\square \frac{\square}{\square} + \square \frac{\square}{\square} = \square \frac{\square}{\square} = \square \frac{\square}{\square}$

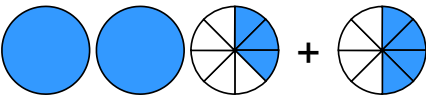

Übertrage die Grafiken in die Bruch-Schreibweise und rechne aus:

① a)  + 


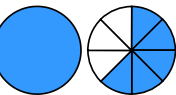
$$\rightarrow \frac{2}{8} + 1 \frac{7}{8} = 2 \frac{1}{8}$$

b)  + 



$$\rightarrow \frac{3}{10} + 1 \frac{5}{10} = 1 \frac{8}{10} = 1 \frac{4}{5}$$

c)  + 



$$\rightarrow 2 \frac{3}{8} + \frac{4}{8} = 2 \frac{7}{8}$$

d)  + 



$$\rightarrow \frac{5}{8} + 1 \frac{5}{8} = 2 \frac{2}{8} = 2 \frac{1}{4}$$

② a)  + 

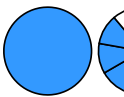
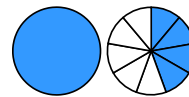
$$\rightarrow \frac{3}{9} + 2 \frac{7}{9} = 3 \frac{1}{9}$$

b)  + 

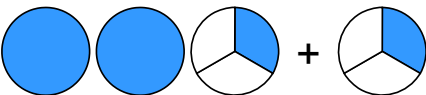

$$\rightarrow 2 \frac{1}{10} + \frac{2}{10} = 2 \frac{3}{10}$$

c)  + 


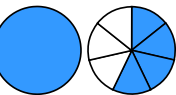
$$\rightarrow \frac{5}{9} + 2 \frac{2}{9} = 2 \frac{7}{9}$$

d)  + 

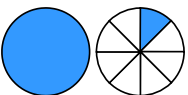
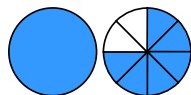
$$\rightarrow 1 \frac{8}{9} + 1 \frac{4}{9} = 3 \frac{3}{9} = 3 \frac{1}{3}$$

③ a)  + 

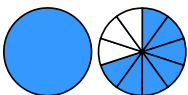
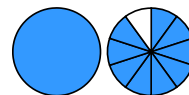
$$\rightarrow 2 \frac{1}{3} + \frac{1}{3} = 2 \frac{2}{3}$$

b)  + 

$$\rightarrow \frac{6}{7} + 1 \frac{4}{7} = 2 \frac{3}{7}$$

c)  + 

$$\rightarrow 1 \frac{1}{8} + 1 \frac{6}{8} = 2 \frac{7}{8}$$

d)  + 

$$\rightarrow 1 \frac{7}{10} + 1 \frac{9}{10} = 3 \frac{6}{10} = 3 \frac{3}{5}$$