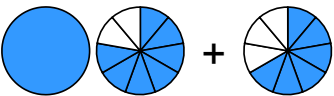
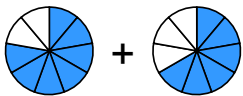

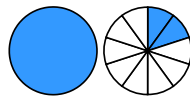

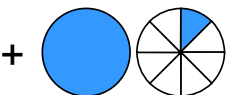


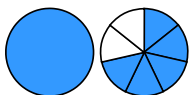
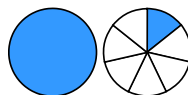
Übertrage die Grafiken in die Bruch-Schreibweise und rechne aus:

1

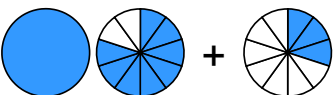
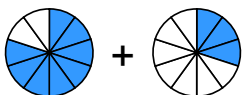
a)  + 
 → $\frac{\square}{\square} + \frac{\square}{\square} = \frac{\square}{\square}$

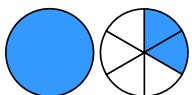

b)  + 
 → $\frac{\square}{\square} + \frac{\square}{\square} = \frac{\square}{\square}$

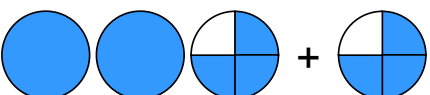

c)  + 
 → $\frac{\square}{\square} + \frac{\square}{\square} = \frac{\square}{\square}$


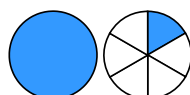
d)  + 
 → $\frac{\square}{\square} + \frac{\square}{\square} = \frac{\square}{\square}$

2

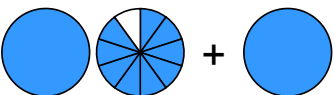

a)  + 
 → $\frac{\square}{\square} + \frac{\square}{\square} = \frac{\square}{\square}$



b)  + 
 → $\frac{\square}{\square} + \frac{\square}{\square} = \frac{\square}{\square}$

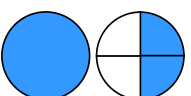
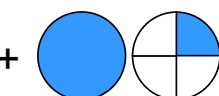
c)  + 
 → $\frac{\square}{\square} + \frac{\square}{\square} = \frac{\square}{\square} = \frac{\square}{\square}$

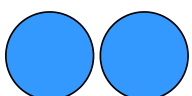

d)  + 
 → $\frac{\square}{\square} + \frac{\square}{\square} = \frac{\square}{\square} = \frac{\square}{\square}$

3

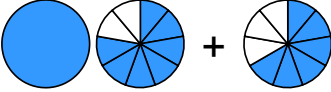

a)  + 
 → $\frac{\square}{\square} + \frac{\square}{\square} = \frac{\square}{\square}$


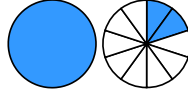
b)  + 
 → $\frac{\square}{\square} + \frac{\square}{\square} = \frac{\square}{\square}$


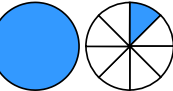
c)  + 
 → $\frac{\square}{\square} + \frac{\square}{\square} = \frac{\square}{\square}$

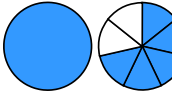
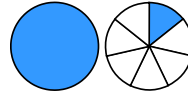
d)  + 
 → $\frac{\square}{\square} + \frac{\square}{\square} = \frac{\square}{\square}$

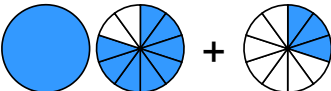

Übertrage die Grafiken in die Bruch-Schreibweise und rechne aus:

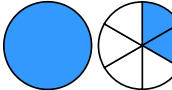

① a)  + 
 $\rightarrow 1 \frac{7}{9} + \frac{6}{9} = 2 \frac{4}{9}$

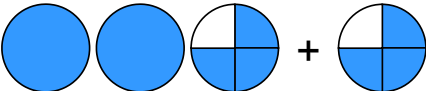

b)  + 
 $\rightarrow \frac{7}{10} + 1 \frac{2}{10} = 1 \frac{9}{10}$


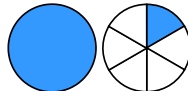
c)  + 
 $\rightarrow \frac{2}{8} + 1 \frac{1}{8} = 1 \frac{3}{8}$

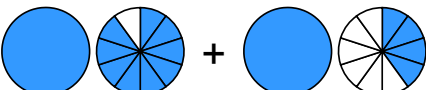

d)  + 
 $\rightarrow 1 \frac{5}{7} + 1 \frac{1}{7} = 2 \frac{6}{7}$



② a)  + 
 $\rightarrow 1 \frac{8}{10} + \frac{3}{10} = 2 \frac{1}{10}$

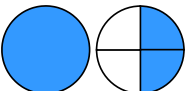
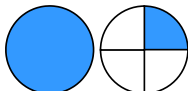
b)  + 
 $\rightarrow 1 \frac{2}{6} + \frac{5}{6} = 2 \frac{1}{6}$



c)  + 
 $\rightarrow 2 \frac{3}{4} + \frac{3}{4} = 3 \frac{2}{4} = 3 \frac{1}{2}$

d)  + 
 $\rightarrow \frac{3}{6} + 1 \frac{1}{6} = 1 \frac{4}{6} = 1 \frac{2}{3}$

③ a)  + 
 $\rightarrow 1 \frac{9}{10} + 1 \frac{4}{10} = 3 \frac{3}{10}$

b)  + 
 $\rightarrow \frac{6}{8} + 2 \frac{7}{8} = 3 \frac{5}{8}$

c)  + 
 $\rightarrow 1 \frac{2}{4} + 1 \frac{1}{4} = 2 \frac{3}{4}$

d)  + 
 $\rightarrow 2 \frac{4}{9} + \frac{1}{9} = 2 \frac{5}{9}$