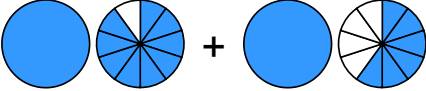

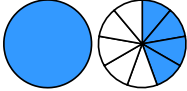
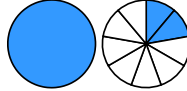


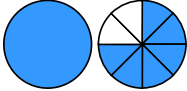



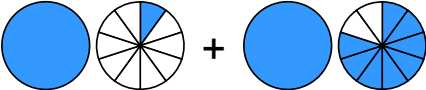

Übertrage die Grafiken in die Bruch-Schreibweise und rechne aus:

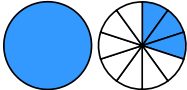

1 a)  + 
 → $\frac{\square}{\square} + \frac{\square}{\square} = \frac{\square}{\square} = \frac{\square}{\square}$

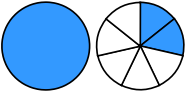
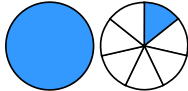
b)  + 
 → $\frac{\square}{\square} + \frac{\square}{\square} = \frac{\square}{\square} = \frac{\square}{\square}$

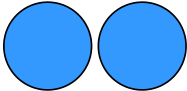

c)  + 
 → $\frac{\square}{\square} + \frac{\square}{\square} = \frac{\square}{\square} = \frac{\square}{\square}$

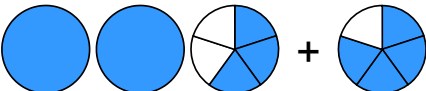

d)  + 
 → $\frac{\square}{\square} + \frac{\square}{\square} = \frac{\square}{\square}$

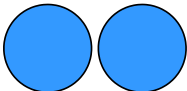

2 a)  + 
 → $\frac{\square}{\square} + \frac{\square}{\square} = \frac{\square}{\square}$

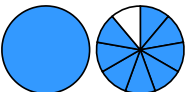
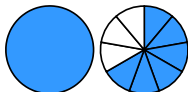
b)  + 
 → $\frac{\square}{\square} + \frac{\square}{\square} = \frac{\square}{\square} = \frac{\square}{\square}$

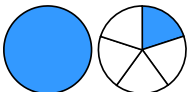
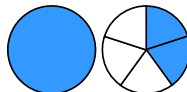
c)  + 
 → $\frac{\square}{\square} + \frac{\square}{\square} = \frac{\square}{\square}$

d)  + 
 → $\frac{\square}{\square} + \frac{\square}{\square} = \frac{\square}{\square}$

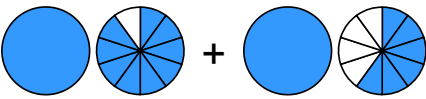
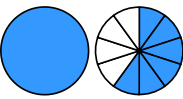
3 a)  + 
 → $\frac{\square}{\square} + \frac{\square}{\square} = \frac{\square}{\square}$

b)  + 
 → $\frac{\square}{\square} + \frac{\square}{\square} = \frac{\square}{\square}$

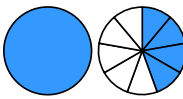
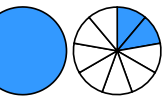
c)  + 
 → $\frac{\square}{\square} + \frac{\square}{\square} = \frac{\square}{\square}$

d)  + 
 → $\frac{\square}{\square} + \frac{\square}{\square} = \frac{\square}{\square}$



Übertrage die Grafiken in die Bruch-Schreibweise und rechne aus:

① a)  + 

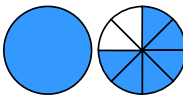

$$\rightarrow 1 \frac{9}{10} + 1 \frac{6}{10} = 3 \frac{5}{10} = 3 \frac{1}{2}$$

b)  + 

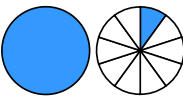
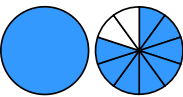
$$\rightarrow 1 \frac{4}{9} + 1 \frac{2}{9} = 2 \frac{6}{9} = 2 \frac{2}{3}$$

c)  + 

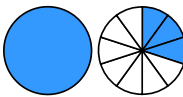

$$\rightarrow \frac{1}{8} + 2 \frac{3}{8} = 2 \frac{4}{8} = 2 \frac{1}{2}$$

d)  + 

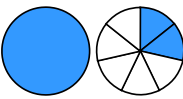
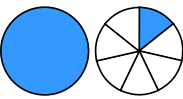
$$\rightarrow 1 \frac{6}{8} + \frac{7}{8} = 2 \frac{5}{8}$$

② a)  + 

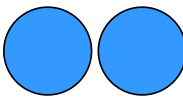

$$\rightarrow 1 \frac{1}{10} + 1 \frac{8}{10} = 2 \frac{9}{10}$$

b)  + 

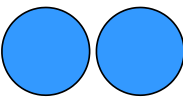
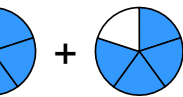
$$\rightarrow 1 \frac{3}{10} + \frac{5}{10} = 1 \frac{8}{10} = 1 \frac{4}{5}$$

c)  + 

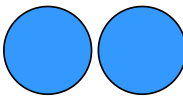

$$\rightarrow 1 \frac{2}{7} + 1 \frac{1}{7} = 2 \frac{3}{7}$$

d)  + 

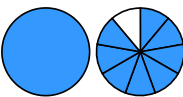
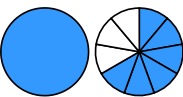
$$\rightarrow 2 \frac{3}{9} + \frac{1}{9} = 2 \frac{4}{9}$$

③ a)  + 

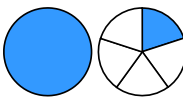
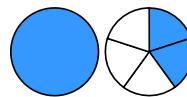
$$\rightarrow 2 \frac{3}{5} + \frac{4}{5} = 3 \frac{2}{5}$$

b)  + 

$$\rightarrow 2 \frac{6}{7} + \frac{5}{7} = 3 \frac{4}{7}$$

c)  + 

$$\rightarrow 1 \frac{8}{9} + 1 \frac{6}{9} = 3 \frac{5}{9}$$

d)  + 

$$\rightarrow 1 \frac{1}{5} + 1 \frac{2}{5} = 2 \frac{3}{5}$$