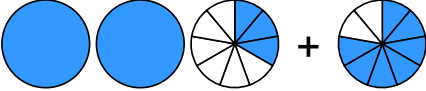

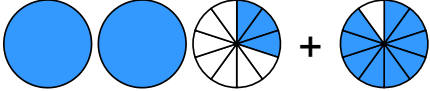



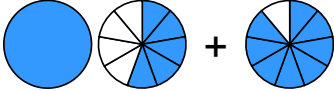





Übertrage die Grafiken in die Bruch-Schreibweise und rechne aus:

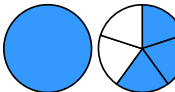
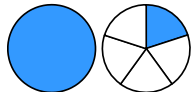
1 a)  + 
 → $\frac{\square}{\square} + \frac{\square}{\square} = \frac{\square}{\square}$

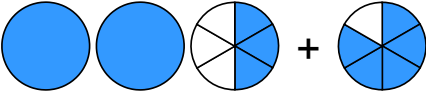

b)  + 
 → $\frac{\square}{\square} + \frac{\square}{\square} = \frac{\square}{\square} = \frac{\square}{\square}$

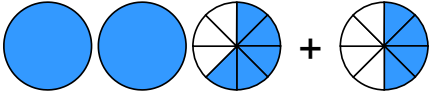

c)  + 
 → $\frac{\square}{\square} + \frac{\square}{\square} = \frac{\square}{\square}$

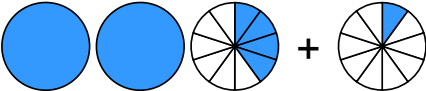

d)  + 
 → $\frac{\square}{\square} + \frac{\square}{\square} = \frac{\square}{\square}$


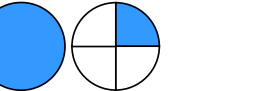
2 a)  + 
 → $\frac{\square}{\square} + \frac{\square}{\square} = \frac{\square}{\square}$

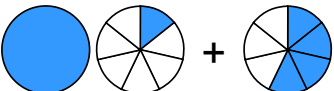

b)  + 
 → $\frac{\square}{\square} + \frac{\square}{\square} = \frac{\square}{\square}$

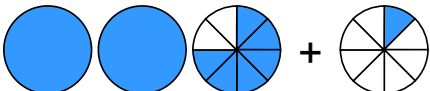

c)  + 
 → $\frac{\square}{\square} + \frac{\square}{\square} = \frac{\square}{\square} = \frac{\square}{\square}$

d)  + 
 → $\frac{\square}{\square} + \frac{\square}{\square} = \frac{\square}{\square}$

3 a)  + 
 → $\frac{\square}{\square} + \frac{\square}{\square} = \frac{\square}{\square} = \frac{\square}{\square}$

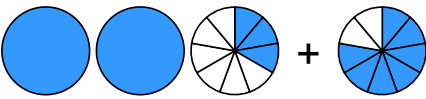

b)  + 
 → $\frac{\square}{\square} + \frac{\square}{\square} = \frac{\square}{\square} = \frac{\square}{\square}$

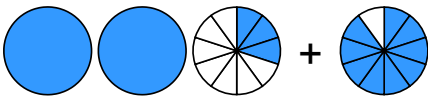

c)  + 
 → $\frac{\square}{\square} + \frac{\square}{\square} = \frac{\square}{\square}$



d)  + 
 → $\frac{\square}{\square} + \frac{\square}{\square} = \frac{\square}{\square}$

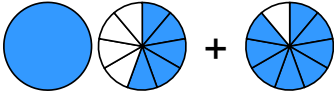

Quelle: www.matheaufgaben.net/arbeitsblaetter/brueche-grafisch/gemischte-zahlen-addieren/



Übertrage die Grafiken in die Bruch-Schreibweise und rechne aus:

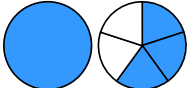
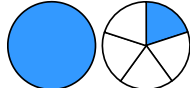
① a)  + 
 $\rightarrow 2\frac{3}{9} + \frac{7}{9} = 3\frac{1}{9}$

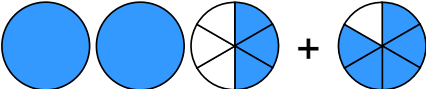

b)  + 
 $\rightarrow 2\frac{3}{10} + \frac{9}{10} = 3\frac{2}{10} = 3\frac{1}{5}$

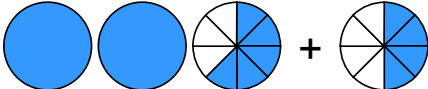

c)  + 
 $\rightarrow \frac{6}{9} + 2\frac{2}{9} = 2\frac{8}{9}$

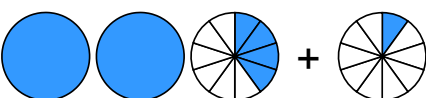

d)  + 
 $\rightarrow 1\frac{5}{9} + \frac{8}{9} = 2\frac{4}{9}$


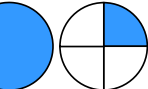
② a)  + 
 $\rightarrow \frac{2}{8} + 2\frac{3}{8} = 2\frac{5}{8}$

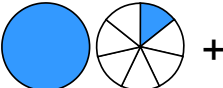

b)  + 
 $\rightarrow 1\frac{3}{5} + 1\frac{1}{5} = 2\frac{4}{5}$

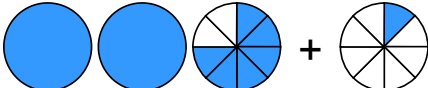

c)  + 
 $\rightarrow 2\frac{3}{6} + \frac{5}{6} = 3\frac{2}{6} = 3\frac{1}{3}$

d)  + 
 $\rightarrow 2\frac{5}{8} + \frac{4}{8} = 3\frac{1}{8}$

③ a)  + 
 $\rightarrow 2\frac{4}{10} + \frac{1}{10} = 2\frac{5}{10} = 2\frac{1}{2}$

b)  + 
 $\rightarrow \frac{1}{4} + 1\frac{1}{4} = 1\frac{2}{4} = 1\frac{1}{2}$

c)  + 
 $\rightarrow 1\frac{1}{7} + \frac{4}{7} = 1\frac{5}{7}$

d)  + 
 $\rightarrow 2\frac{6}{8} + \frac{1}{8} = 2\frac{7}{8}$