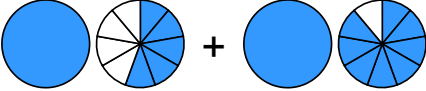
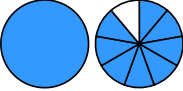



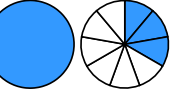

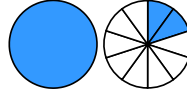


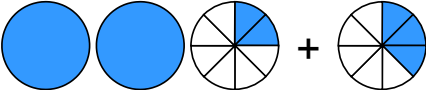

Übertrage die Grafiken in die Bruch-Schreibweise und rechne aus:



1 a)  + 
 → $\frac{\square}{\square} + \frac{\square}{\square} = \frac{\square}{\square}$

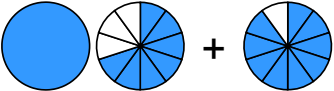

b)  + 
 → $\frac{\square}{\square} + \frac{\square}{\square} = \frac{\square}{\square}$



c)  + 
 → $\frac{\square}{\square} + \frac{\square}{\square} = \frac{\square}{\square}$

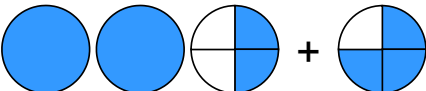

d)  + 
 → $\frac{\square}{\square} + \frac{\square}{\square} = \frac{\square}{\square}$



2 a)  + 
 → $\frac{\square}{\square} + \frac{\square}{\square} = \frac{\square}{\square}$


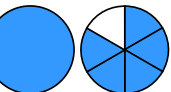
b)  + 
 → $\frac{\square}{\square} + \frac{\square}{\square} = \frac{\square}{\square}$

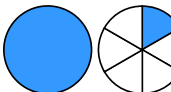
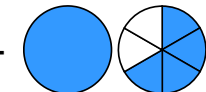
c)  + 
 → $\frac{\square}{\square} + \frac{\square}{\square} = \frac{\square}{\square} = \frac{\square}{\square}$

d)  + 
 → $\frac{\square}{\square} + \frac{\square}{\square} = \frac{\square}{\square}$

3 a)  + 
 → $\frac{\square}{\square} + \frac{\square}{\square} = \frac{\square}{\square}$

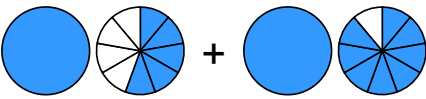
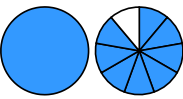
b)  + 
 → $\frac{\square}{\square} + \frac{\square}{\square} = \frac{\square}{\square}$

c)  + 
 → $\frac{\square}{\square} + \frac{\square}{\square} = \frac{\square}{\square}$



d)  + 
 → $\frac{\square}{\square} + \frac{\square}{\square} = \frac{\square}{\square}$

Quelle: www.matheaufgaben.net/arbeitsblaetter/brueche-grafisch/gemischte-zahlen-addieren/


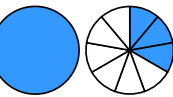
Übertrage die Grafiken in die Bruch-Schreibweise und rechne aus:

① a)  + 


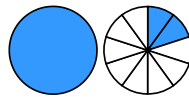
$$\rightarrow 1\frac{5}{9} + 1\frac{8}{9} = 3\frac{4}{9}$$

b)  + 

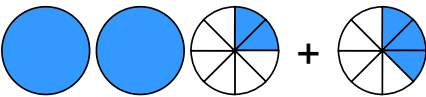

$$\rightarrow \frac{6}{8} + 2\frac{1}{8} = 2\frac{7}{8}$$

c)  + 


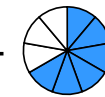
$$\rightarrow \frac{7}{9} + 1\frac{3}{9} = 2\frac{1}{9}$$

d)  + 

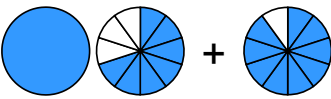
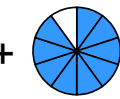
$$\rightarrow \frac{1}{10} + 1\frac{2}{10} = 1\frac{3}{10}$$

② a)  + 



$$\rightarrow 2\frac{2}{8} + \frac{3}{8} = 2\frac{5}{8}$$

b)  + 

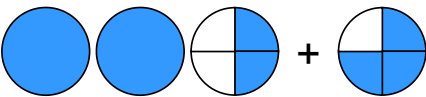

$$\rightarrow 2\frac{1}{9} + \frac{6}{9} = 2\frac{7}{9}$$

c)  + 



$$\rightarrow 1\frac{7}{10} + \frac{9}{10} = 2\frac{6}{10} = 2\frac{3}{5}$$

d)  + 


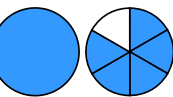
$$\rightarrow 2\frac{4}{10} + \frac{3}{10} = 2\frac{7}{10}$$

③ a)  + 

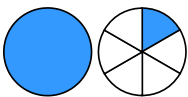
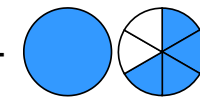
$$\rightarrow 2\frac{2}{4} + \frac{3}{4} = 3\frac{1}{4}$$

b)  + 

$$\rightarrow \frac{2}{7} + 2\frac{1}{7} = 2\frac{3}{7}$$

c)  + 

$$\rightarrow \frac{2}{6} + 1\frac{5}{6} = 2\frac{1}{6}$$

d)  + 

$$\rightarrow 1\frac{1}{6} + 1\frac{4}{6} = 2\frac{5}{6}$$