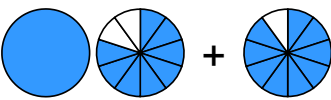



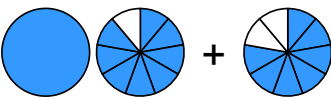



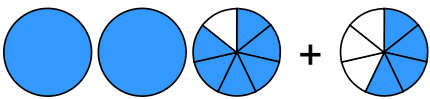

Übertrage die Grafiken in die Bruch-Schreibweise und rechne aus:

1

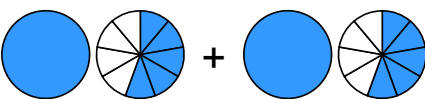
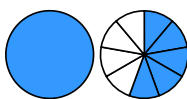
a)  + 
 → $\frac{\square}{\square} + \frac{\square}{\square} = \frac{\square}{\square}$



b)  + 
 → $\frac{\square}{\square} + \frac{\square}{\square} = \frac{\square}{\square} = \frac{\square}{\square}$

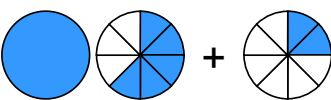

c)  + 
 → $\frac{\square}{\square} + \frac{\square}{\square} = \frac{\square}{\square} = \frac{\square}{\square}$

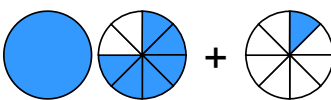

d)  + 
 → $\frac{\square}{\square} + \frac{\square}{\square} = \frac{\square}{\square}$

2

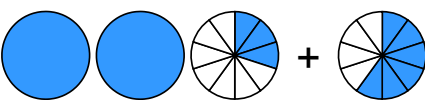
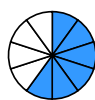
a)  + 
 → $\frac{\square}{\square} + \frac{\square}{\square} = \frac{\square}{\square}$

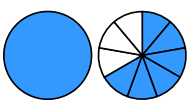
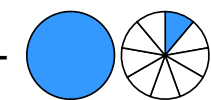
b)  + 
 → $\frac{\square}{\square} + \frac{\square}{\square} = \frac{\square}{\square} = \frac{\square}{\square}$

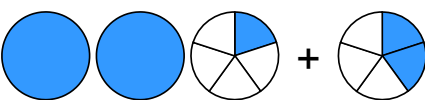
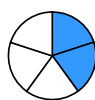
c)  + 
 → $\frac{\square}{\square} + \frac{\square}{\square} = \frac{\square}{\square}$

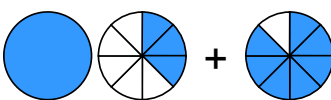

d)  + 
 → $\frac{\square}{\square} + \frac{\square}{\square} = \frac{\square}{\square}$

3

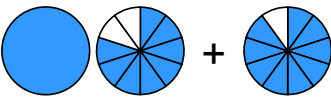

a)  + 
 → $\frac{\square}{\square} + \frac{\square}{\square} = \frac{\square}{\square}$



b)  + 
 → $\frac{\square}{\square} + \frac{\square}{\square} = \frac{\square}{\square}$

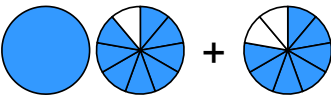

c)  + 
 → $\frac{\square}{\square} + \frac{\square}{\square} = \frac{\square}{\square}$

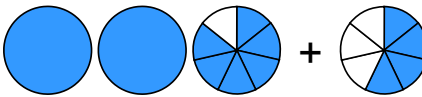

d)  + 
 → $\frac{\square}{\square} + \frac{\square}{\square} = \frac{\square}{\square} = \frac{\square}{\square}$

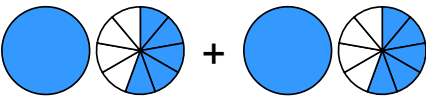

Übertrage die Grafiken in die Bruch-Schreibweise und rechne aus:



① a)  + 
 $\rightarrow 1 \frac{8}{10} + \frac{9}{10} = 2 \frac{7}{10}$

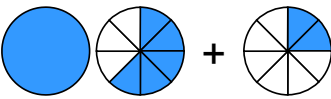

b)  + 
 $\rightarrow \frac{2}{9} + 2 \frac{4}{9} = 2 \frac{6}{9} = 2 \frac{2}{3}$

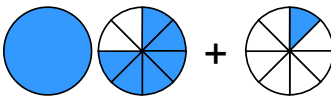

c)  + 
 $\rightarrow 1 \frac{8}{9} + \frac{7}{9} = 2 \frac{6}{9} = 2 \frac{2}{3}$

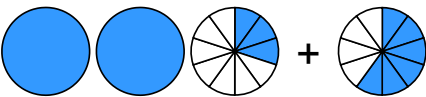

d)  + 
 $\rightarrow 2 \frac{6}{7} + \frac{4}{7} = 3 \frac{3}{7}$

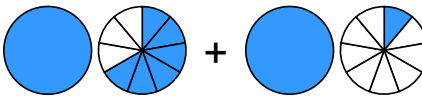

② a)  + 
 $\rightarrow 1 \frac{5}{9} + 1 \frac{5}{9} = 3 \frac{1}{9}$

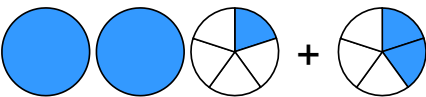
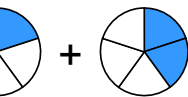
b)  + 
 $\rightarrow \frac{1}{6} + 2 \frac{2}{6} = 2 \frac{3}{6} = 2 \frac{1}{2}$

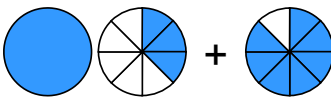

c)  + 
 $\rightarrow 1 \frac{5}{8} + \frac{2}{8} = 1 \frac{7}{8}$

d)  + 
 $\rightarrow 1 \frac{6}{8} + \frac{1}{8} = 1 \frac{7}{8}$

③ a)  + 
 $\rightarrow 2 \frac{3}{10} + \frac{6}{10} = 2 \frac{9}{10}$

b)  + 
 $\rightarrow 1 \frac{6}{9} + 1 \frac{1}{9} = 2 \frac{7}{9}$

c)  + 
 $\rightarrow 2 \frac{1}{5} + \frac{2}{5} = 2 \frac{3}{5}$

d)  + 
 $\rightarrow 1 \frac{3}{8} + \frac{7}{8} = 2 \frac{2}{8} = 2 \frac{1}{4}$