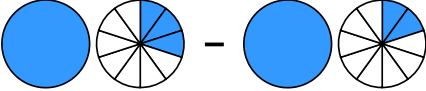
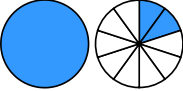
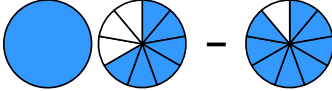

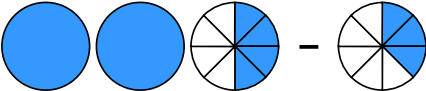

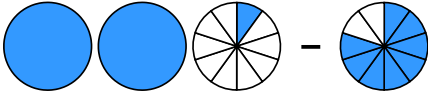



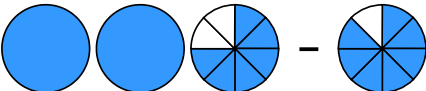

Übertrage die Grafiken in die Bruch-Schreibweise und rechne aus:

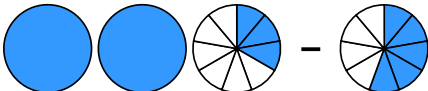

1 a)  - 
 → $\frac{\square}{\square} - \frac{\square}{\square} = \frac{\square}{\square}$

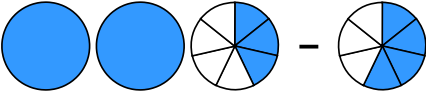

b)  - 
 → $\frac{\square}{\square} - \frac{\square}{\square} = \frac{\square}{\square}$

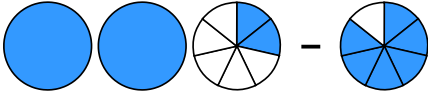

c)  - 
 → $\frac{\square}{\square} - \frac{\square}{\square} = \frac{\square}{\square}$

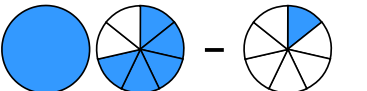

d)  - 
 → $\frac{\square}{\square} - \frac{\square}{\square} = \frac{\square}{\square}$

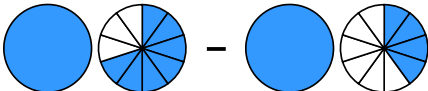
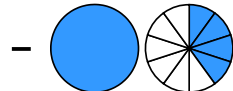
2 a)  - 
 → $\frac{\square}{\square} - \frac{\square}{\square} = \frac{\square}{\square}$

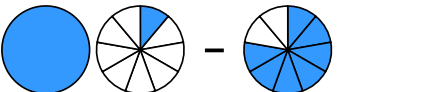
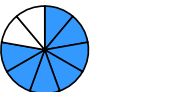
b)  - 
 → $\frac{\square}{\square} - \frac{\square}{\square} = \frac{\square}{\square}$



c)  - 
 → $\frac{\square}{\square} - \frac{\square}{\square} = \frac{\square}{\square}$

d)  - 
 → $\frac{\square}{\square} - \frac{\square}{\square} = \frac{\square}{\square}$

3 a)  - 
 → $\frac{\square}{\square} - \frac{\square}{\square} = \frac{\square}{\square}$

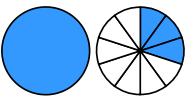
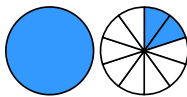
b)  - 
 → $\frac{\square}{\square} - \frac{\square}{\square} = \frac{\square}{\square}$

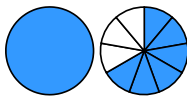

c)  - 
 → $\frac{\square}{\square} - \frac{\square}{\square} = \frac{\square}{\square} = \frac{\square}{\square}$

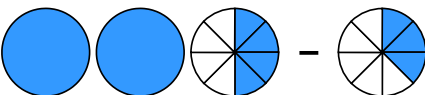

d)  - 
 → $\frac{\square}{\square} - \frac{\square}{\square} = \frac{\square}{\square} = \frac{\square}{\square}$

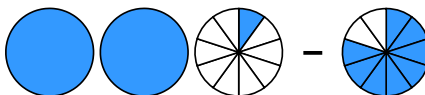

Quelle: www.matheaufgaben.net/arbeitsblaetter/brueche-grafisch/gemischte-zahlen-subtrahieren/

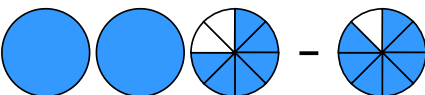

Übertrage die Grafiken in die Bruch-Schreibweise und rechne aus:

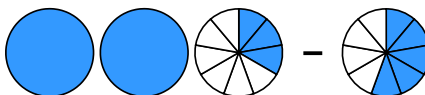

① a)  - 
 $\rightarrow 1\frac{3}{10} - 1\frac{2}{10} = \frac{1}{10}$

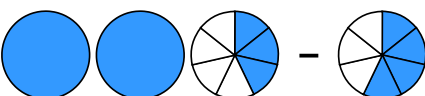

b)  - 
 $\rightarrow 1\frac{6}{9} - \frac{8}{9} = \frac{7}{9}$

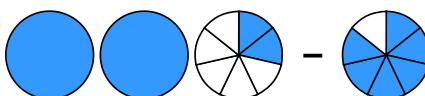

c)  - 
 $\rightarrow 2\frac{4}{8} - \frac{3}{8} = 2\frac{1}{8}$



d)  - 
 $\rightarrow 2\frac{1}{10} - \frac{8}{10} = 1\frac{3}{10}$

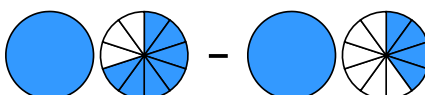
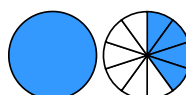
② a)  - 
 $\rightarrow 2\frac{6}{8} - \frac{7}{8} = 1\frac{7}{8}$



b)  - 
 $\rightarrow 2\frac{3}{9} - \frac{5}{9} = 1\frac{7}{9}$

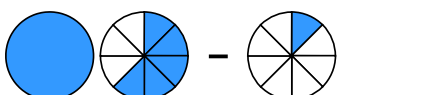

c)  - 
 $\rightarrow 2\frac{3}{7} - \frac{4}{7} = 1\frac{6}{7}$

d)  - 
 $\rightarrow 2\frac{2}{7} - \frac{6}{7} = 1\frac{3}{7}$

③ a)  - 
 $\rightarrow 1\frac{5}{7} - \frac{1}{7} = 1\frac{4}{7}$

b)  - 
 $\rightarrow 1\frac{7}{10} - 1\frac{4}{10} = \frac{3}{10}$

c)  - 
 $\rightarrow 1\frac{1}{9} - \frac{7}{9} = \frac{3}{9} = \frac{1}{3}$

d)  - 
 $\rightarrow 1\frac{5}{8} - \frac{1}{8} = 1\frac{4}{8} = 1\frac{1}{2}$