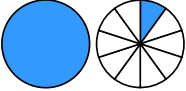

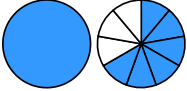
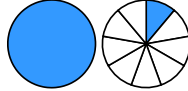
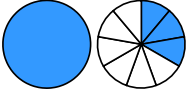

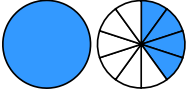



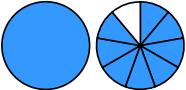

Übertrage die Grafiken in die Bruch-Schreibweise und rechne aus:

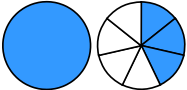

1 a)  -   
 →  $\frac{\square}{\square} - \frac{\square}{\square} = \frac{\square}{\square} = \frac{\square}{\square}$

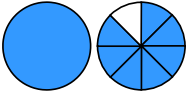
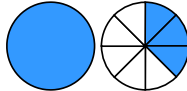
b)  -   
 →  $\frac{\square}{\square} - \frac{\square}{\square} = \frac{\square}{\square}$

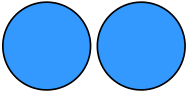
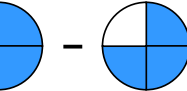
c)  -   
 →  $\frac{\square}{\square} - \frac{\square}{\square} = \frac{\square}{\square}$

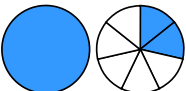

d)  -   
 →  $\frac{\square}{\square} - \frac{\square}{\square} = \frac{\square}{\square}$

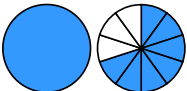

2 a)  -   
 →  $\frac{\square}{\square} - \frac{\square}{\square} = \frac{\square}{\square} = \frac{\square}{\square}$

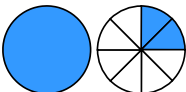
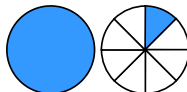
b)  -   
 →  $\frac{\square}{\square} - \frac{\square}{\square} = \frac{\square}{\square}$

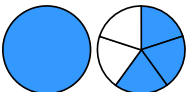

c)  -   
 →  $\frac{\square}{\square} - \frac{\square}{\square} = \frac{\square}{\square} = \frac{\square}{\square}$

d)  -   
 →  $\frac{\square}{\square} - \frac{\square}{\square} = \frac{\square}{\square}$

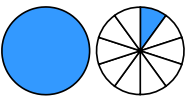

3 a)  -   
 →  $\frac{\square}{\square} - \frac{\square}{\square} = \frac{\square}{\square}$

b)  -   
 →  $\frac{\square}{\square} - \frac{\square}{\square} = \frac{\square}{\square} = \frac{\square}{\square}$

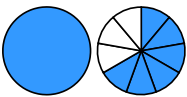
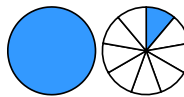
c)  -   
 →  $\frac{\square}{\square} - \frac{\square}{\square} = \frac{\square}{\square}$

d)  -   
 →  $\frac{\square}{\square} - \frac{\square}{\square} = \frac{\square}{\square}$

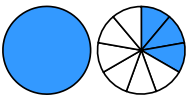

Übertrage die Grafiken in die Bruch-Schreibweise und rechne aus:

① a)  - 

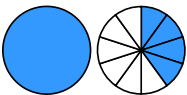

$$\rightarrow 1 \frac{1}{10} - \frac{5}{10} = \frac{6}{10} = \frac{3}{5}$$

b)  - 

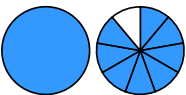

$$\rightarrow 1 \frac{6}{9} - 1 \frac{1}{9} = \frac{5}{9}$$

c)  - 

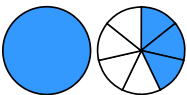

$$\rightarrow 1 \frac{3}{9} - \frac{7}{9} = \frac{5}{9}$$

d)  - 

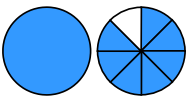
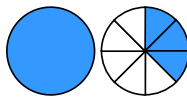
$$\rightarrow 1 \frac{4}{10} - \frac{3}{10} = 1 \frac{1}{10}$$

② a)  - 

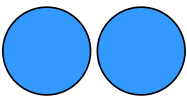
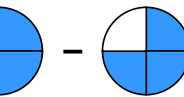
$$\rightarrow 1 \frac{8}{9} - \frac{5}{9} = 1 \frac{3}{9} = 1 \frac{1}{3}$$

b)  - 

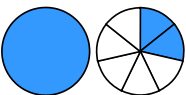

$$\rightarrow 1 \frac{3}{7} - \frac{6}{7} = \frac{4}{7}$$

c)  - 

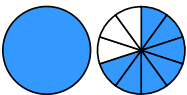

$$\rightarrow 1 \frac{7}{8} - 1 \frac{3}{8} = \frac{4}{8} = \frac{1}{2}$$

d)  - 

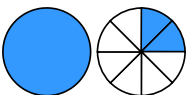
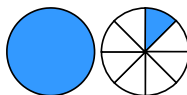
$$\rightarrow 2 \frac{2}{4} - \frac{3}{4} = 1 \frac{3}{4}$$

③ a)  - 

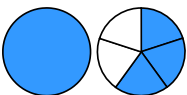

$$\rightarrow 1 \frac{2}{7} - \frac{5}{7} = \frac{4}{7}$$

b)  - 

$$\rightarrow 1 \frac{7}{10} - \frac{9}{10} = \frac{8}{10} = \frac{4}{5}$$

c)  - 

$$\rightarrow 1 \frac{2}{8} - 1 \frac{1}{8} = \frac{1}{8}$$

d)  - 

$$\rightarrow 1 \frac{3}{5} - \frac{1}{5} = 1 \frac{2}{5}$$