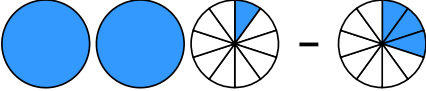
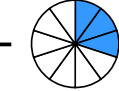


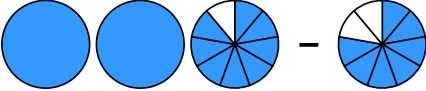





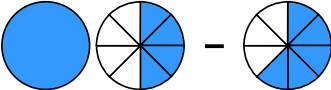
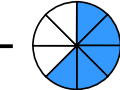
Übertrage die Grafiken in die Bruch-Schreibweise und rechne aus:

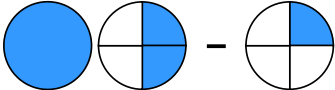
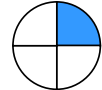
1 a)  - 
 → $\frac{\square}{\square} - \frac{\square}{\square} = \frac{\square}{\square} = \frac{\square}{\square}$

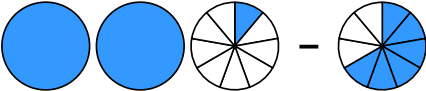

b)  - 
 → $\frac{\square}{\square} - \frac{\square}{\square} = \frac{\square}{\square}$

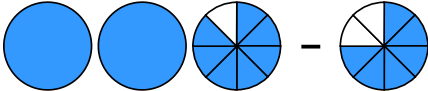

c)  - 
 → $\frac{\square}{\square} - \frac{\square}{\square} = \frac{\square}{\square}$

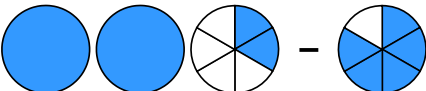

d)  - 
 → $\frac{\square}{\square} - \frac{\square}{\square} = \frac{\square}{\square}$

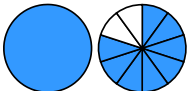
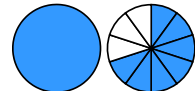
2 a)  - 
 → $\frac{\square}{\square} - \frac{\square}{\square} = \frac{\square}{\square}$

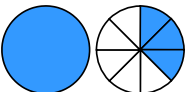
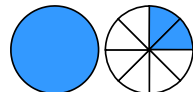
b)  - 
 → $\frac{\square}{\square} - \frac{\square}{\square} = \frac{\square}{\square}$



c)  - 
 → $\frac{\square}{\square} - \frac{\square}{\square} = \frac{\square}{\square}$

d)  - 
 → $\frac{\square}{\square} - \frac{\square}{\square} = \frac{\square}{\square}$

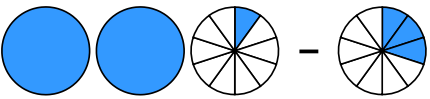

3 a)  - 
 → $\frac{\square}{\square} - \frac{\square}{\square} = \frac{\square}{\square} = \frac{\square}{\square}$

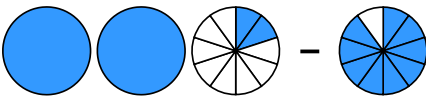

b)  - 
 → $\frac{\square}{\square} - \frac{\square}{\square} = \frac{\square}{\square}$

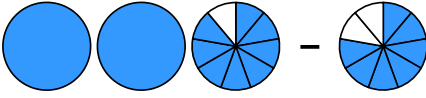

c)  - 
 → $\frac{\square}{\square} - \frac{\square}{\square} = \frac{\square}{\square}$

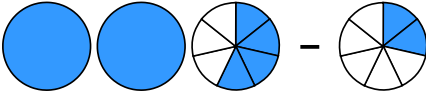

d)  - 
 → $\frac{\square}{\square} - \frac{\square}{\square} = \frac{\square}{\square}$

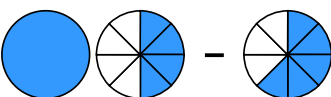

Übertrage die Grafiken in die Bruch-Schreibweise und rechne aus:

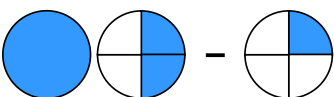

① a)  - 
 $\rightarrow 2\frac{1}{10} - \frac{3}{10} = 1\frac{8}{10} = 1\frac{4}{5}$

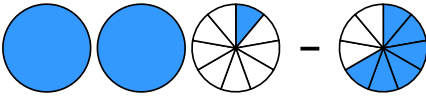

b)  - 
 $\rightarrow 2\frac{2}{10} - \frac{9}{10} = 1\frac{3}{10}$

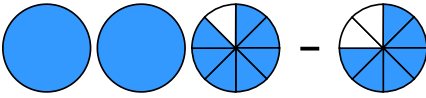

c)  - 
 $\rightarrow 2\frac{8}{9} - \frac{7}{9} = 2\frac{1}{9}$

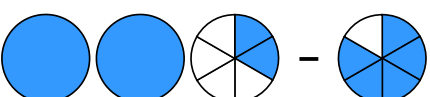

d)  - 
 $\rightarrow 2\frac{4}{7} - \frac{2}{7} = 2\frac{2}{7}$

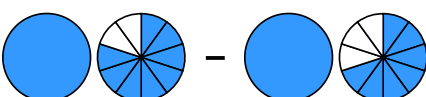
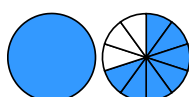
② a)  - 
 $\rightarrow 1\frac{4}{8} - \frac{5}{8} = \frac{7}{8}$

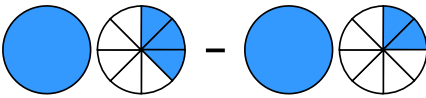
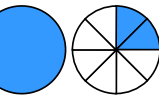
b)  - 
 $\rightarrow 1\frac{2}{4} - \frac{1}{4} = 1\frac{1}{4}$

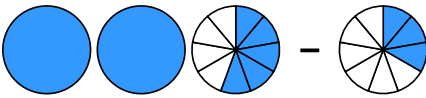

c)  - 
 $\rightarrow 2\frac{1}{9} - \frac{6}{9} = 1\frac{4}{9}$

d)  - 
 $\rightarrow 2\frac{7}{8} - \frac{6}{8} = 2\frac{1}{8}$

③ a)  - 
 $\rightarrow 2\frac{2}{6} - \frac{5}{6} = 1\frac{3}{6} = 1\frac{1}{2}$

b)  - 
 $\rightarrow 1\frac{8}{10} - 1\frac{7}{10} = \frac{1}{10}$

c)  - 
 $\rightarrow 1\frac{3}{8} - 1\frac{2}{8} = \frac{1}{8}$

d)  - 
 $\rightarrow 2\frac{5}{9} - \frac{3}{9} = 2\frac{2}{9}$