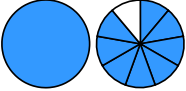
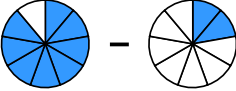
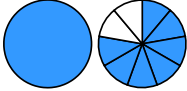

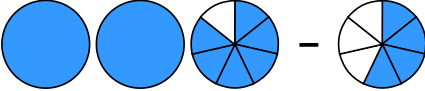

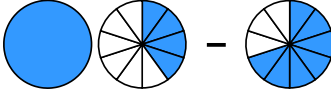



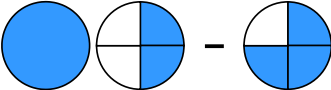

Übertrage die Grafiken in die Bruch-Schreibweise und rechne aus:

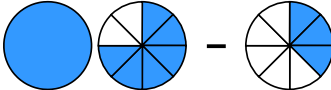

1 a)  - 
 → $\frac{\square}{\square} - \frac{\square}{\square} = \frac{\square}{\square} = \frac{\square}{\square}$

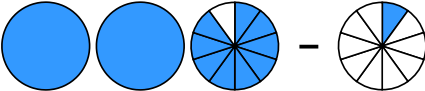

b)  - 
 → $\frac{\square}{\square} - \frac{\square}{\square} = \frac{\square}{\square} = \frac{\square}{\square}$

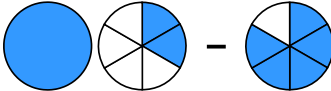

c)  - 
 → $\frac{\square}{\square} - \frac{\square}{\square} = \frac{\square}{\square}$

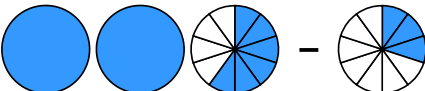

d)  - 
 → $\frac{\square}{\square} - \frac{\square}{\square} = \frac{\square}{\square}$

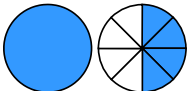
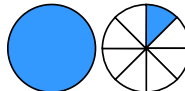
2 a)  - 
 → $\frac{\square}{\square} - \frac{\square}{\square} = \frac{\square}{\square}$

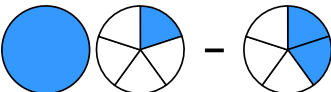

b)  - 
 → $\frac{\square}{\square} - \frac{\square}{\square} = \frac{\square}{\square}$

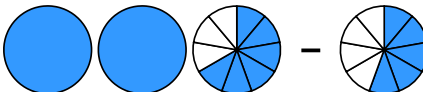
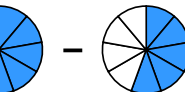
c)  - 
 → $\frac{\square}{\square} - \frac{\square}{\square} = \frac{\square}{\square} = \frac{\square}{\square}$

d)  - 
 → $\frac{\square}{\square} - \frac{\square}{\square} = \frac{\square}{\square} = \frac{\square}{\square}$

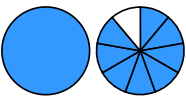
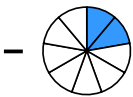
3 a)  - 
 → $\frac{\square}{\square} - \frac{\square}{\square} = \frac{\square}{\square}$

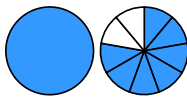

b)  - 
 → $\frac{\square}{\square} - \frac{\square}{\square} = \frac{\square}{\square}$

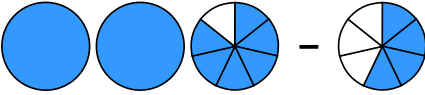
c)  - 
 → $\frac{\square}{\square} - \frac{\square}{\square} = \frac{\square}{\square}$

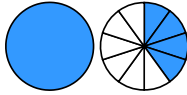
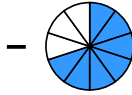
d)  - 
 → $\frac{\square}{\square} - \frac{\square}{\square} = \frac{\square}{\square}$

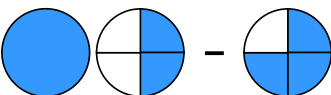
Übertrage die Grafiken in die Bruch-Schreibweise und rechne aus:

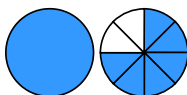

① a)  - 
 $\rightarrow 1 \frac{8}{9} - \frac{2}{9} = 1 \frac{6}{9} = 1 \frac{2}{3}$

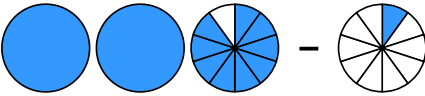
b)  - 
 $\rightarrow 1 \frac{7}{9} - \frac{4}{9} = 1 \frac{3}{9} = 1 \frac{1}{3}$

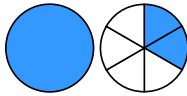
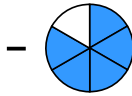
c)  -
 $\rightarrow 2 \frac{6}{7} - \frac{4}{7} = 2 \frac{2}{7}$

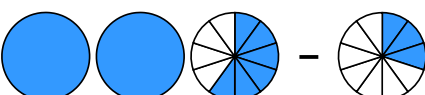
d)  - 
 $\rightarrow 1 \frac{4}{10} - \frac{7}{10} = \frac{7}{10}$

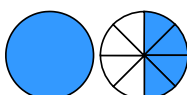
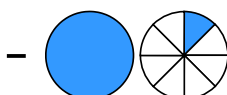
② a)  -
 $\rightarrow 1 \frac{2}{4} - \frac{3}{4} = \frac{3}{4}$

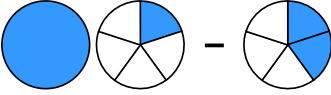
b)  - 
 $\rightarrow 1 \frac{6}{8} - \frac{3}{8} = 1 \frac{3}{8}$

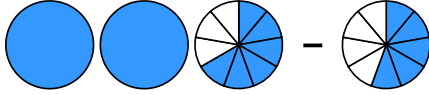
c)  -
 $\rightarrow 2 \frac{9}{10} - \frac{1}{10} = 2 \frac{8}{10} = 2 \frac{4}{5}$

d)  - 
 $\rightarrow 1 \frac{2}{6} - \frac{5}{6} = \frac{3}{6} = \frac{1}{2}$

③ a)  -
 $\rightarrow 2 \frac{6}{10} - \frac{3}{10} = 2 \frac{3}{10}$

b)  - 
 $\rightarrow 1 \frac{4}{8} - 1 \frac{1}{8} = \frac{3}{8}$

c)  -
 $\rightarrow 1 \frac{1}{5} - \frac{2}{5} = \frac{4}{5}$

d)  -
 $\rightarrow 2 \frac{6}{9} - \frac{5}{9} = 2 \frac{1}{9}$